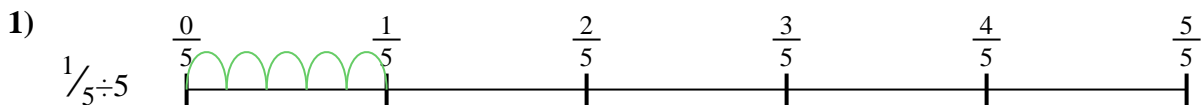




Use the numberline to solve each problem. The first is marked for you.

Answers



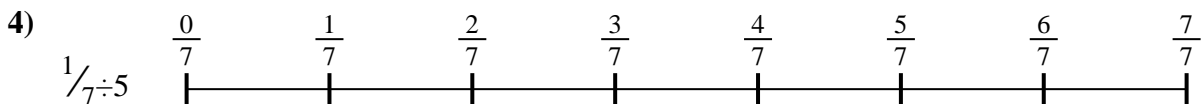
1. _____



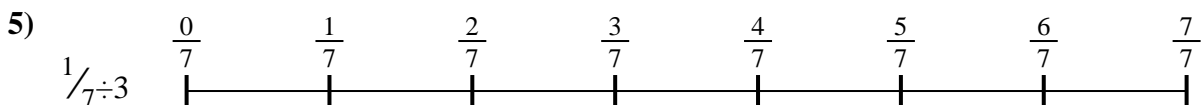
2. _____



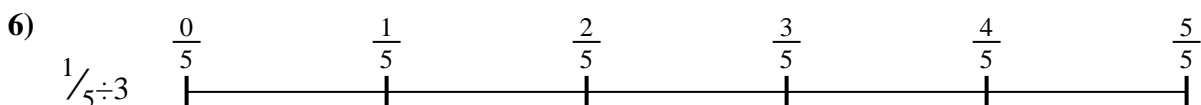
3. _____



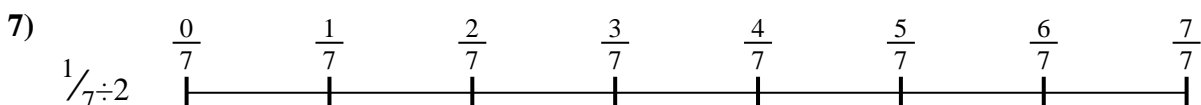
4. _____



5. _____




6. _____



7. _____



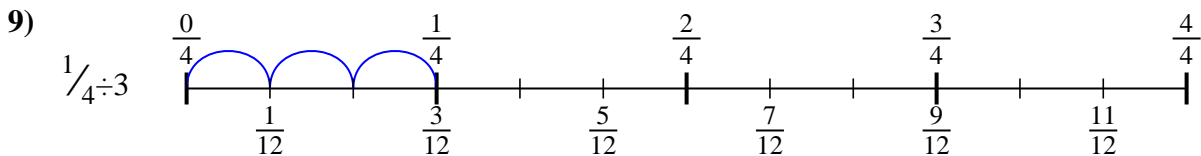
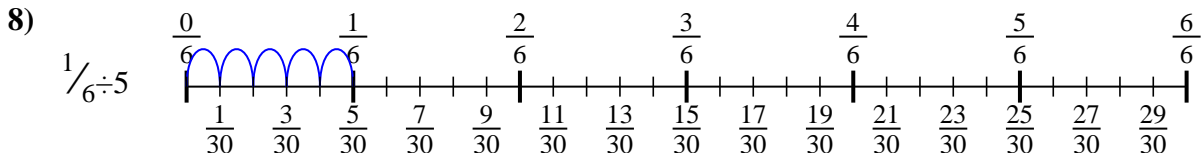
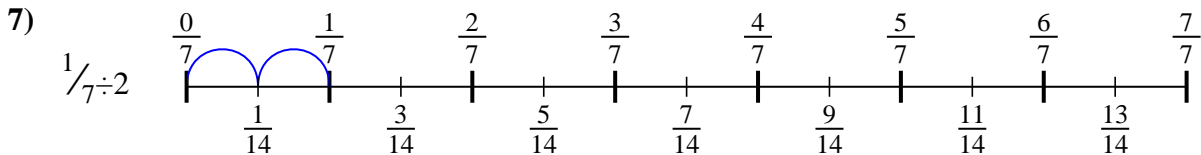
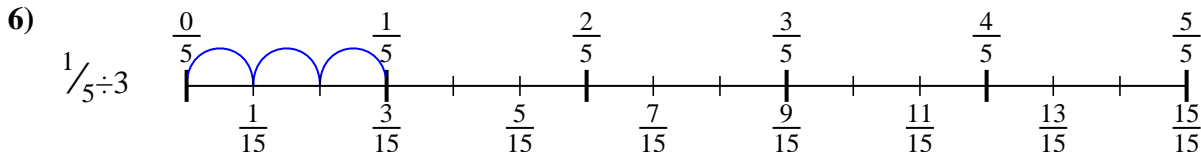
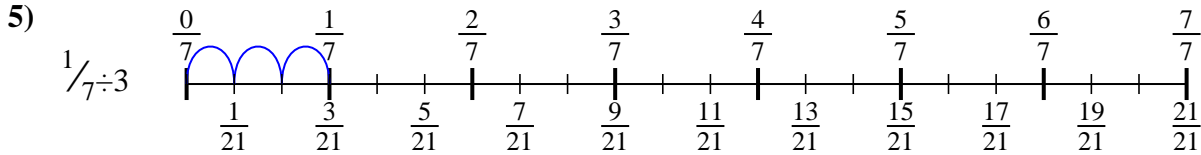
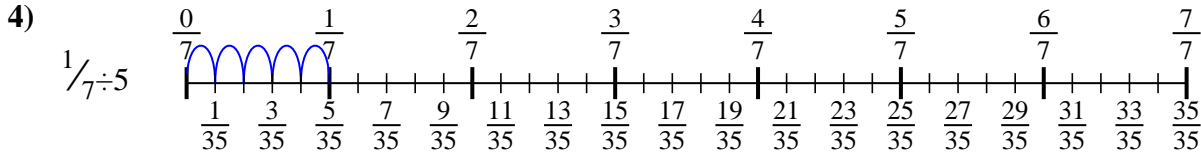
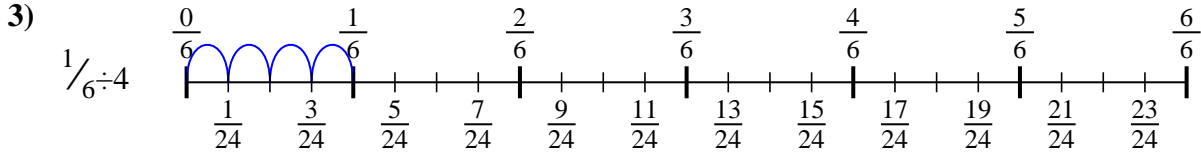
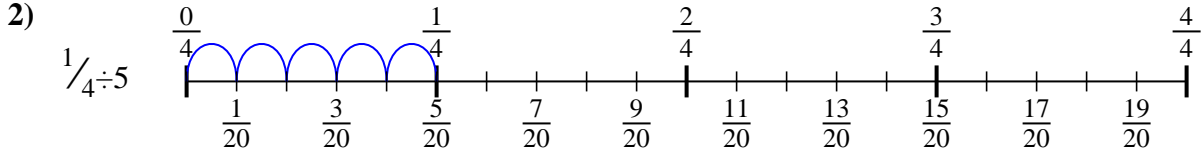
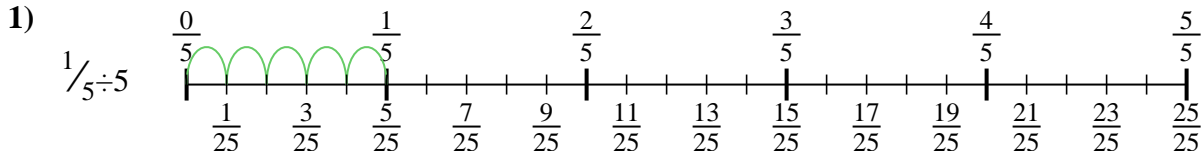
8. _____



9. _____



Use the numberline to solve each problem. The first is marked for you.



Answers

1. $\frac{1}{25}$

2. $\frac{1}{20}$

3. $\frac{1}{24}$

4. $\frac{1}{35}$

5. $\frac{1}{21}$

6. $\frac{1}{15}$

7. $\frac{1}{14}$

8. $\frac{1}{30}$

9. $\frac{1}{12}$



Use the numberline to solve each problem. The first is marked for you.

Answers

$1/35$

$1/24$

$1/14$

$1/12$

$1/20$

$1/15$

$1/21$

$1/30$

$1/25$

1. _____

2. _____

3. _____

4. _____

5. _____

6. _____

7. _____

8. _____

9. _____

1)

2)

3)

4)

5)

6)

7)

8)

9)